

II ()

10

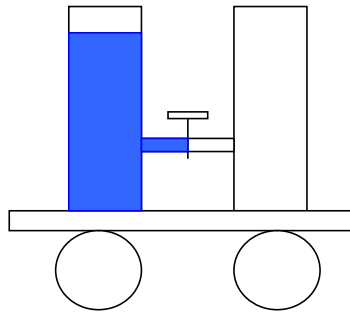
-3 20

1

20

20

4

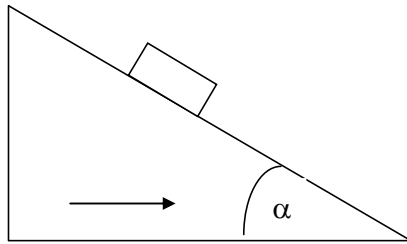


-60.

2

α

$\mu?$



-100.

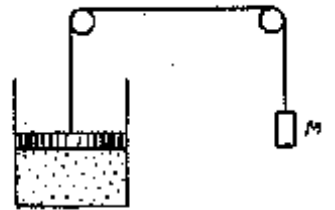
3

$S = 100 \text{ }^2$

$m = 28$

$= 50$ (100°)
 $0 = 1$?

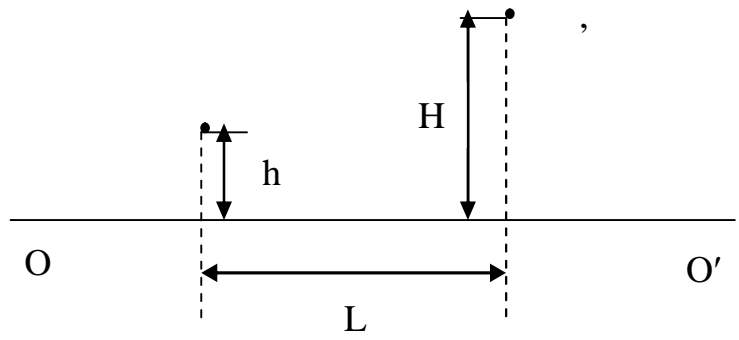
0°



-80.

4

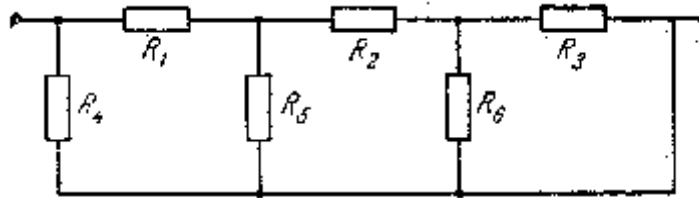
$L = 10$, $h = 2$, $= 3$



- 80.

5

$R_1 = 0,5$, $R_2 = 1,5$, $R_3 = R_4 = R_6 = 1$, $R_5 = 2/3$



- 60.

$g = 10 / ^2.$