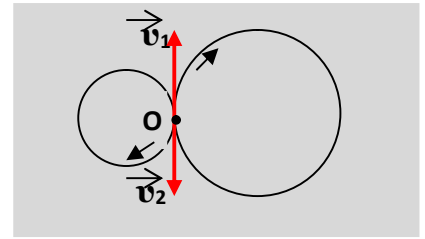
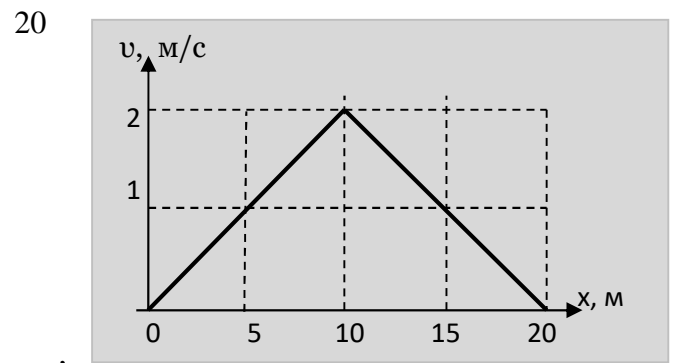


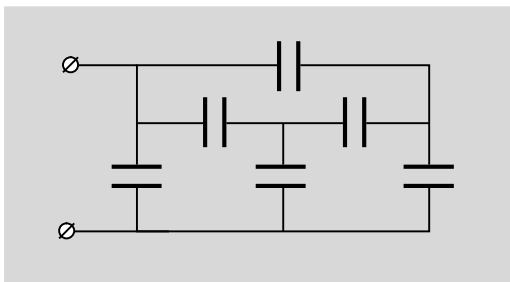
1.  $v_1=7$  / ,  $v_2=5$  / ( . ) .  
 2 . ?



2.  $L = 40$  .  
 $v_0$



3. 755 . 748 , 740 .  
 736 .



4. ,  
 5. , 0,25 , 0,1 .  
 = 1  
 ?

?