

10

1.

$l = 16$,

$h = 80$

$v_0 = 8 /$
 $= 30^\circ$.

?

$10 / ^2$.

2.

(.) .

R,

R/2,

R/2,

R/4.

B

3.

10 ,

30 .

$c_w = 4200 /$. ,

$c_m = 3900 /$. ,

$c_y = 2500 /$. ,

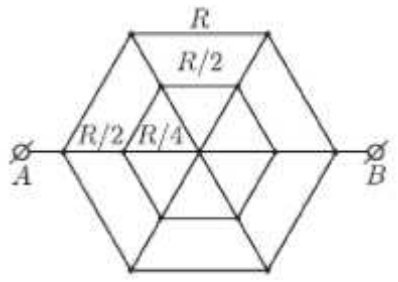
4.

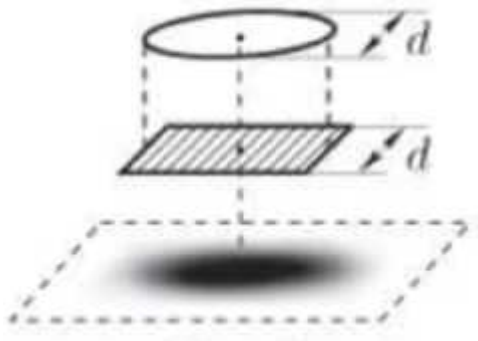
$d=2$.

d (.1).

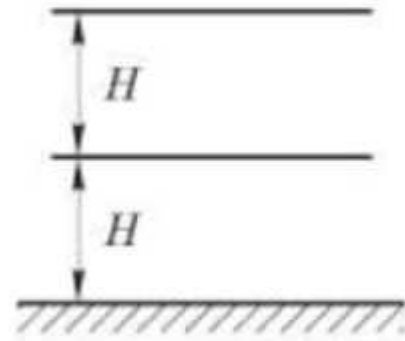
$H 3$ (.1.1).

?





.1



.1.1